

# Hvilke tal gemmer Avi og maden?

## Mål med aktiviteten

Børnehaveklassen Fælles Mål:

- Eleven har viden om talsymbolerne og deres ordning.
- Eleven har viden om metoder til antalsbestemmelse

Matematik Fælles Mål:

- Eleven kan anvende flercifrede naturlige tal til at beskrive antal og rækkefølge.
- Eleven har viden om naturlige tals opbygning i titalssystemet.

## Organisering:

- Rum: Klasselokale
- Tid: 30 minutter

**Rekvisitter:** Elevmateriale findes på [denmagiskemadkasse.dk](http://denmagiskemadkasse.dk) Der er flere versioner og sværhedsgrader, så materialet kan anvendes differentieret.  
Blyanter

## Forud for aktiviteten:

Print elevmaterialet, så der er et ark til hver elev. Husk at vælge sværhedsgrad.

## Aktiviteten:

1. Hver elev får et elevark.
2. Eleverne skal skrive de tal, som Avi eller maden gemmer.

# Hvilket tal gemmer Avi og maden?

1	2	3	4	5	6	7	8	9	10
---	---	---	---	---	---	---	---	---	----

1	2	3		5	6	7	8	9	10
---	---	---	---	---	---	---	---	---	----



1	2	3	4	5	6	7	8	9	10
---	---	---	---	---	---	---	---	---	----

1	2	3	4	5	6	7		9	10
---	---	---	---	---	---	---	--	---	----



1	2	3	4	5	6	7	8	9	10
---	---	---	---	---	---	---	---	---	----

	2	3	4	5	6	7	8	9	10
---	---	---	---	---	---	---	---	---	----



# Hvilke tal gemmer Avi og maden?

1	2	3	4	5	6	7	8	9	10
---	---	---	---	---	---	---	---	---	----

1	2	3		5	6	7	8		10
---	---	---	---	---	---	---	---	---	----





\_\_\_\_\_



\_\_\_\_\_

1	2	3	4	5	6	7	8	9	10
---	---	---	---	---	---	---	---	---	----

1	2	3	4			7	8	9	10
---	---	---	---	---	---	---	---	---	----



\_\_\_\_\_



\_\_\_\_\_

1	2	3	4	5	6	7	8	9	10
---	---	---	---	---	---	---	---	---	----

	2	3	4	5	6	7	8	9	
---	---	---	---	---	---	---	---	---	---



\_\_\_\_\_



\_\_\_\_\_

# Hvilke tal gemmer Avi og maden?

1	2	3	4	5	6	7	8	9	10
---	---	---	---	---	---	---	---	---	----

1	2			5	6	7	8		10
---	---	---	---	---	---	---	---	---	----



\_\_\_\_\_






\_\_\_\_\_



\_\_\_\_\_

1	2	3	4	5	6	7	8	9	10
---	---	---	---	---	---	---	---	---	----

1		3		4		7	8	9	10
---	---	---	---	---	---	---	---	---	----



\_\_\_\_\_




\_\_\_\_\_



\_\_\_\_\_

1	2	3	4	5	6	7	8	9	10
---	---	---	---	---	---	---	---	---	----

	2	3	4		6		8	9	10
---	---	---	---	---	---	--	---	---	----



\_\_\_\_\_



\_\_\_\_\_



\_\_\_\_\_

# Hvilke tal gemmer Avi og maden?



# Hvilke tal gemmer Avi og maden?

