

Hvilke tal gemmer Avi og maden?

Mål med aktiviteten

- Barnet har viden om talsymbolerne og deres ordning.
- Barnet har viden om metoder til antalsbestemmelse

Organisering:

- Rum: Lokale med bord og stole
- Tid: 20 minutter

Rekvisitter: Skriftligt materiale findes på de næste sider. Der er flere versioner og sværhedsgrader, så materialet kan anvendes differentieret.

Blyanter

Forud for aktiviteten:

Print materialet, så der er et ark til hvert barn. Husk at vælge sværhedsgrad.

Aktiviteten:

1. Hvert barn får et ark.
2. Børnene skal skrive de tal, som Avi eller maden gemmer.

Hvilket tal gemmer Avi og maden?

1	2	3	4	5	6	7	8	9	10
---	---	---	---	---	---	---	---	---	----

1	2	3		5	6	7	8	9	10
---	---	---	---	---	---	---	---	---	----

	_____
---	-------

1	2	3	4	5	6	7	8	9	10
---	---	---	---	---	---	---	---	---	----

1	2	3	4	5	6	7		9	10
---	---	---	---	---	---	---	--	---	----

	_____
---	-------

1	2	3	4	5	6	7	8	9	10
---	---	---	---	---	---	---	---	---	----

	2	3	4	5	6	7	8	9	10
---	---	---	---	---	---	---	---	---	----

	_____
---	-------

Hvilke tal gemmer Avi og maden?

1	2	3	4	5	6	7	8	9	10
---	---	---	---	---	---	---	---	---	----

1	2	3		5	6	7	8		10
---	---	---	---	---	---	---	---	---	----





1	2	3	4	5	6	7	8	9	10
---	---	---	---	---	---	---	---	---	----

1	2	3	4			7	8	9	10
---	---	---	---	---	---	---	---	---	----





1	2	3	4	5	6	7	8	9	10
---	---	---	---	---	---	---	---	---	----

	2	3	4	5	6	7	8	9	
---	---	---	---	---	---	---	---	---	---











Hvilke tal gemmer Avi og maden?




1	2	3	4	5	6	7	8	9	10
---	---	---	---	---	---	---	---	---	----

1	2			5	6	7	8		10
---	---	---	---	---	---	---	---	---	----

 _____
  _____
  _____

1	2	3	4	5	6	7	8	9	10
---	---	---	---	---	---	---	---	---	----

1		3		4		7	8	9	10
---	---	---	---	---	---	---	---	---	----

 _____
  _____
  _____

1	2	3	4	5	6	7	8	9	10
---	---	---	---	---	---	---	---	---	----

	2	3	4		6		8	9	10
---	---	---	---	---	---	--	---	---	----

 _____
  _____
  _____

Hvilke tal gemmer Avi og maden?



Hvilke tal gemmer Avi og maden?

